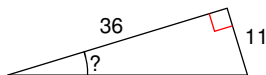


Summer Assignment Review-Using SOHCAHTOA to solve for angles

© 2013 Kuta Software LLC. All rights reserved.

Find the measure of the indicated angle to the nearest degree.

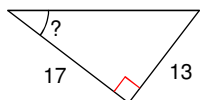
1)



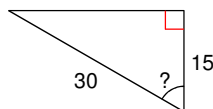
2)



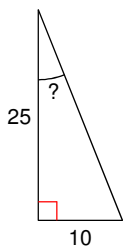
3)



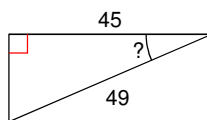
4)



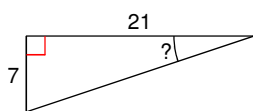
5)



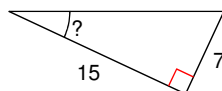
6)



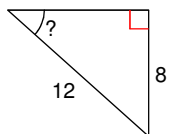
7)



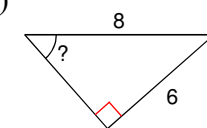
8)



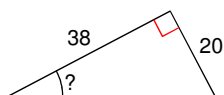
9)



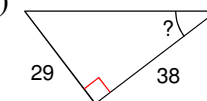
10)



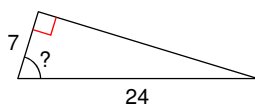
11)



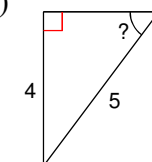
12)



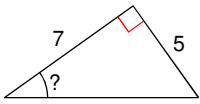
13)



14)



15)



Answers to Summer Assignment Review-Using SOHCAHTOA to solve for angles

1) 17°

2) 69°

3) 37°

4) 60°

5) 22°

6) 23°

7) 18°

8) 25°

9) 42°

10) 49°

11) 28°

12) 37°

13) 73°

14) 53°

15) 36°