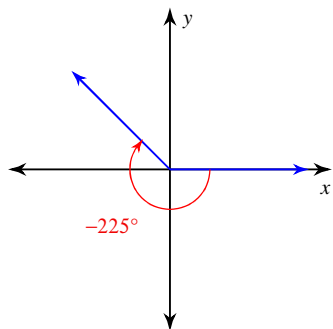


Assignment

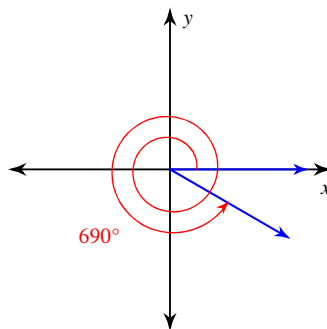
© 2014 Kuta Software LLC. All rights reserved.

Find the reference angle.

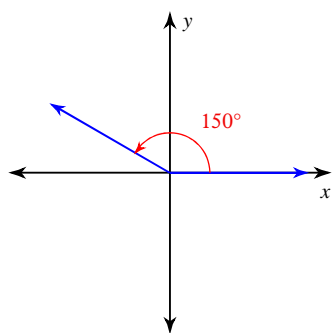
1)



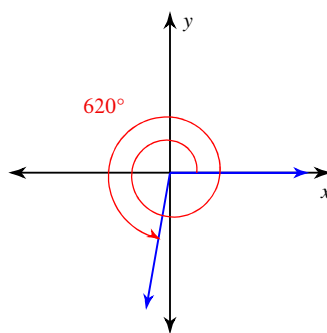
2)



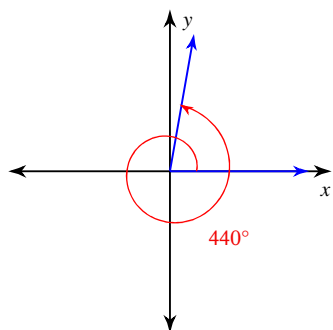
3)



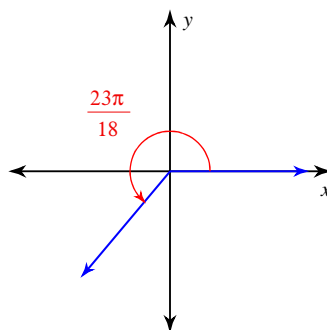
4)



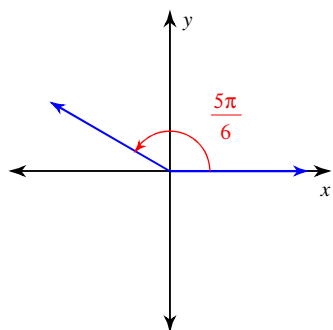
5)



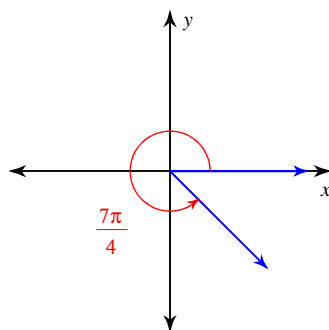
6)



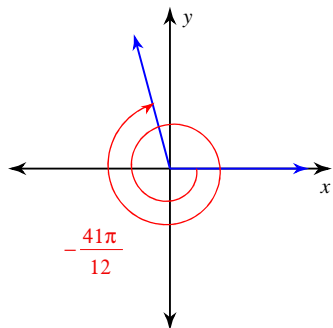
7)



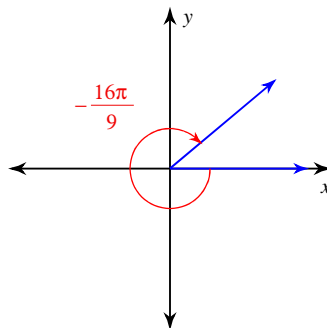
8)



9)



10)

11) 570° 12) -470° 13) -220° 14) 445° 15) 310° 16) $\frac{35\pi}{9}$ 17) $-\frac{43\pi}{18}$ 18) $\frac{15\pi}{4}$ 19) $-\frac{8\pi}{3}$ 20) $\frac{41\pi}{12}$

Answers to Assignment (ID: 1)

1) 45°

5) 80°

9) $\frac{5\pi}{12}$

13) 40°

17) $\frac{7\pi}{18}$

2) 30°

6) $\frac{5\pi}{18}$

10) $\frac{2\pi}{9}$

14) 85°

18) $\frac{\pi}{4}$

3) 30°

7) $\frac{\pi}{6}$

11) 30°

15) 50°

19) $\frac{\pi}{3}$

4) 80°

8) $\frac{\pi}{4}$

12) 70°

16) $\frac{\pi}{9}$

20) $\frac{5\pi}{12}$