

Please plot the WINNING TIMES data on graph paper! Think before you plot. Make it neat and use a straight edge!

PLACE YOUR HOMEWORK ON YOUR DESK.

Year	Time (min:sec.)
1924	06:02.2
1928	05:42.8
1932	05:28.5
1936	05:26.4
1948	05:17.8
1952	05:12.1
1956	04:54.6
1960	04:50.6
1964	04:43.3
1968	04:31.3
1972	04:19.0
1976	04:09.9
1980	04:08.8
1984	04:07.1

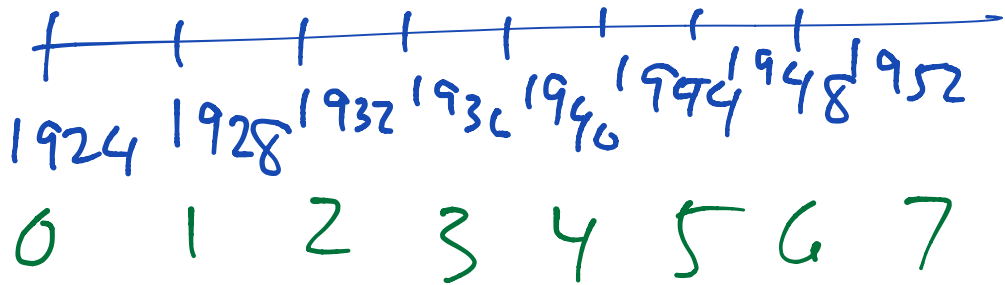
362.2
342.8
328.5
326.4
317.8
312.1
294.6
290.6
283.3
271.3
259
249.9
248.8

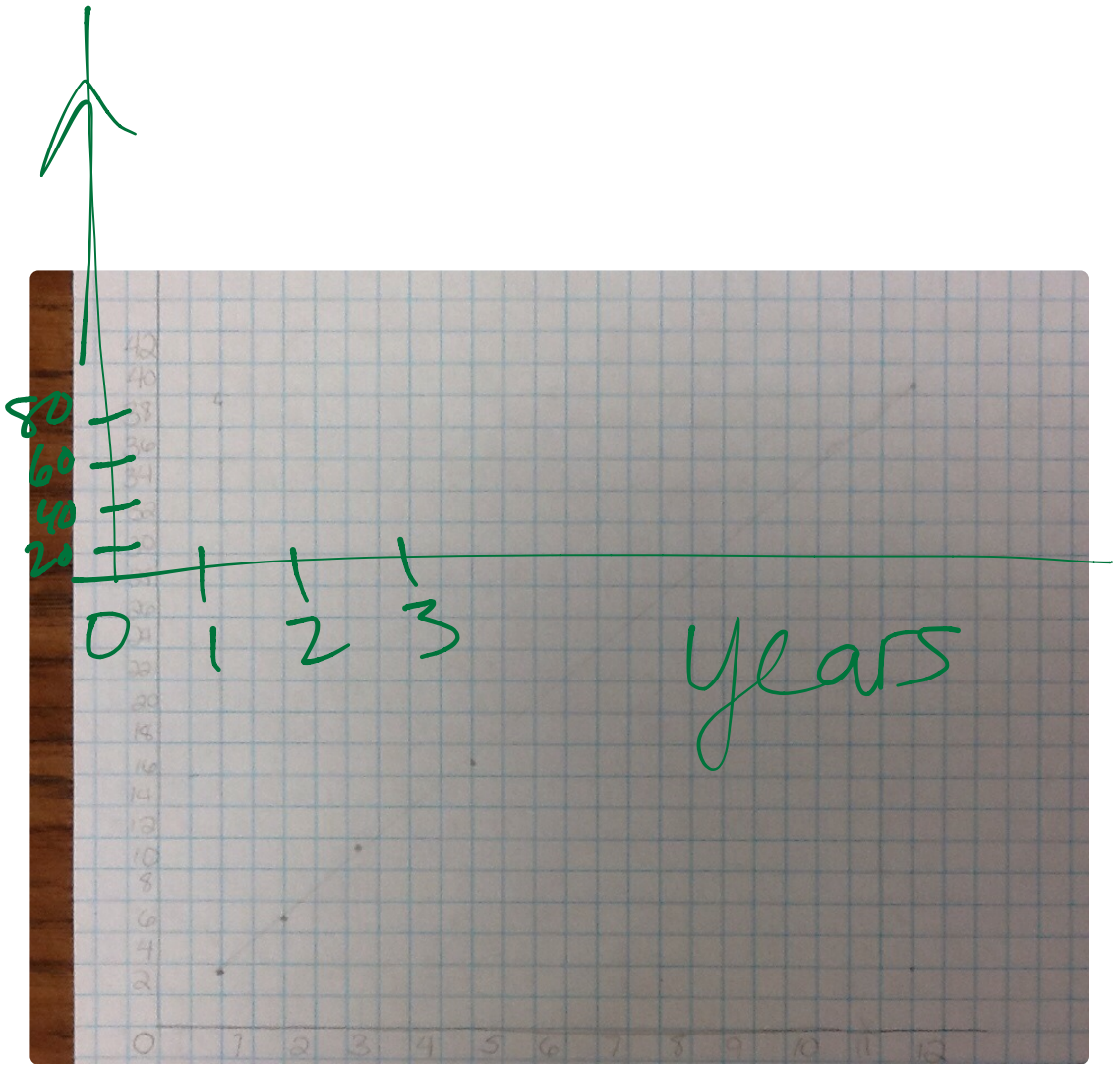
60
4

240
31.3

240
19

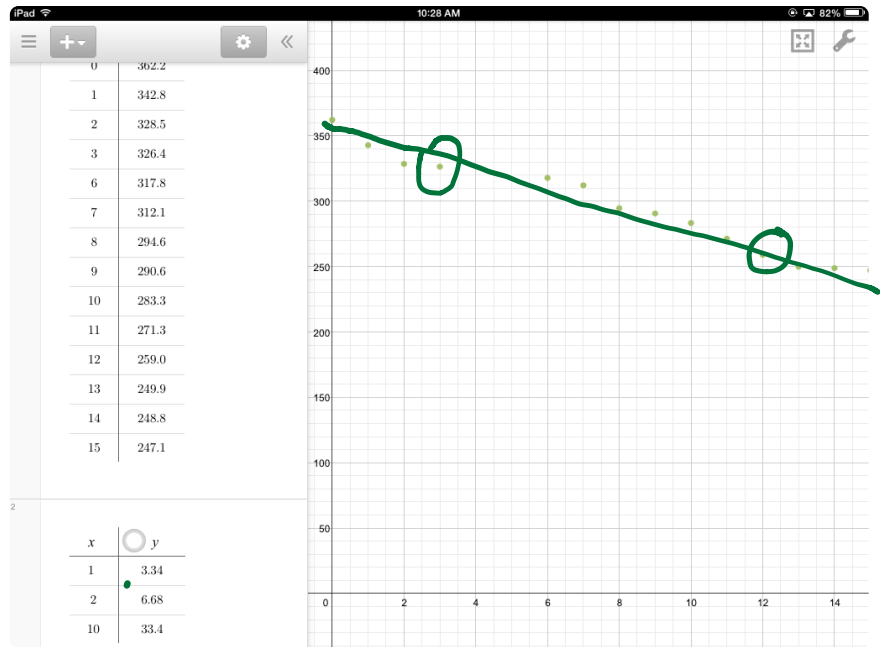
247.1





,

line of best fit



$(3, 326.4)$
 $(13, 249.9)$

Open note Quiz

① Calculate slope & reduce:

$(3, -7)$ $(-5, 12)$

